

Northwestern University EECS 203  
Midterm Solutions for Problems #1,2

1)

In order to give the minimal POS form for the following function, we start by drawing the K-Map, and then circle the zeros in order to determine  $\bar{f}$ .

$$f(a,b,c,d) = \sum(0,2,3,4,12,14) + d(7,8)$$

abcd	00	01	11	10
00	1	0	1	1
01	1	0	X	0
11	1	0	0	1
10	X	0	0	0

We can now use DeMorgan's laws to solve for  $f$ .

$$\bar{f} = \bar{c}d + ad + \bar{a}b + \bar{a}bc$$

$$f = \overline{\bar{c}d + ad + \bar{a}b + \bar{a}bc}$$

$$f = (\bar{c}d)(ad)(\bar{a}b)(\bar{a}bc)$$

$$f = (c + \bar{d})(\bar{a} + d)(\bar{a} + b)(\bar{a} + \bar{b} + \bar{c})$$

2)

Solved using Quine-McCluskey Method:

$$f = \bar{a}\bar{b} + \bar{b}c + \bar{a}bc + \bar{a}bc$$

Truth Table:

a	b	c	f
0	0	0	1
0	0	1	1
0	1	0	1
0	1	1	0
1	0	0	1
1	0	1	1
1	1	0	0
1	1	1	0

Quine-McCluskey Chart:

# of 1's			
0	0 000	0,1 00X 0,2 0X0 0,4 X00	0,1,4,5 X0X
1	1 001 2 010 4 100	1,5 X01 4,5 10X	
2	5 101		

Quine-McCluskey Table:

Minterm	0X0	X0X
0	√	√
1		√
2	√	
4		√
5		√

Based on the tables, we get the solution,  $f = \bar{b} + \bar{a}c$

2)

Solved using algebraic manipulation:


Manipulation	Reason
$f = \overline{ab} + \overline{bc} + \overline{abc} + \overline{abc}$	Given
$f = \overline{b}(\overline{a} + \overline{c} + \overline{ac}) + \overline{abc}$	$x(y+z) = xy+xz$
$f = \overline{b}(\overline{a} + \overline{ac} + \overline{c} + \overline{ac}) + \overline{abc}$	$x = x+x$
$f = \overline{b}((\overline{a} + \overline{a})(\overline{a} + \overline{c}) + (\overline{c} + \overline{a})(\overline{c} + \overline{c})) + \overline{abc}$	$x+yz = (x+y)(x+z)$
$f = \overline{b}(\overline{a} + \overline{c} + \overline{c} + \overline{a}) + \overline{abc}$	$x + \overline{x} = 1$
$f = \overline{b} + \overline{abc}$	$x + \overline{x} = 1$
$f = (\overline{b} + \overline{b})(\overline{b} + \overline{ac})$	$x+yz = (x+y)(x+z)$
$f = \overline{b} + \overline{ac}$	$x + \overline{x} = 1, x \cdot 1 = x$

Hence the solution is  $f = \overline{b} + \overline{ac}$

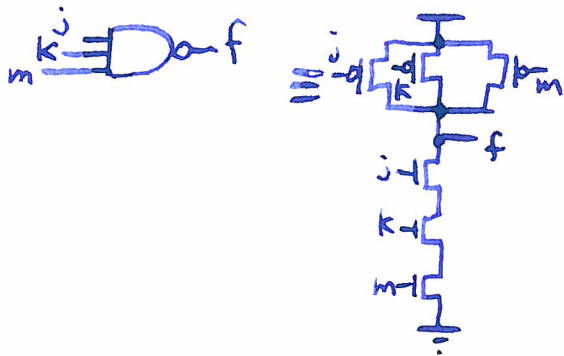
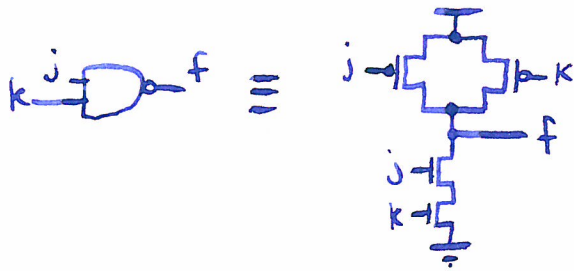
$$\begin{aligned}
 3) C_o(a, b, c_i) &= ab + ac_i + bc_i \\
 &= \overline{\overline{ab + ac_i + bc_i}} \\
 &= \overline{\overline{ab} \cdot \overline{ac_i} \cdot \overline{bc_i}}
 \end{aligned}$$

	ab		
$c_i$	0	1	0
	0	1	1

already minimal.



This is fine, as is a single-gate design.



4) Valid input combinations:

a	b	c
0	1	1
1	0	1
1	1	0

Three combinations.

$$\lceil \log_2 3 \rceil = 2$$

Two output bits required (p, q).

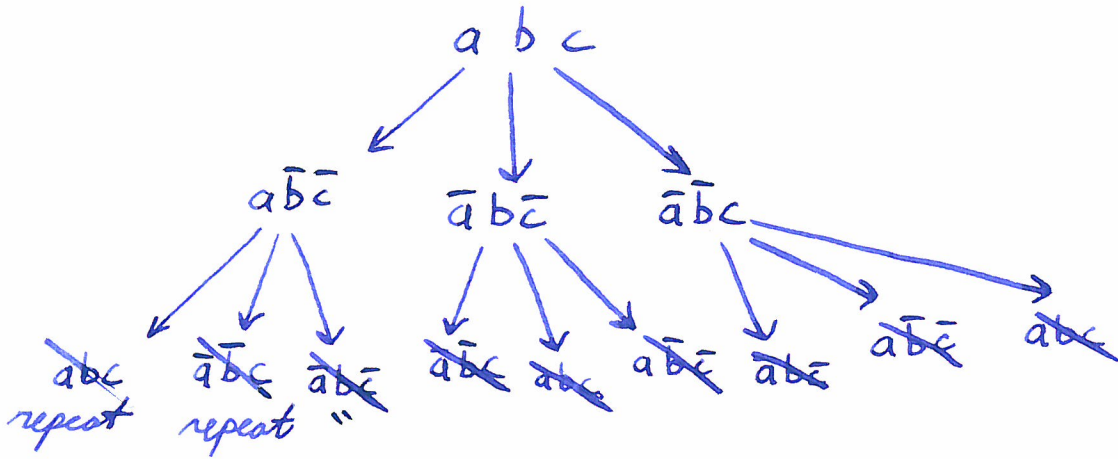
a	b	c	p	q
0	1	1	0	1
1	0	1	1	0
1	1	0	1	1

$p = a$
$q = b$

If we used 00, 01, 10,  
we would have a  
valid but more costly  
implementation.

Instead, just pick  
any two inputs allowing  
the input combination  
to be uniquely identified.

5) We will determine the set of all 3-bit numbers that may be reached by taking 2-bit steps from some initial number,  $abc$ .



Thus, exactly four numbers can be reached by changing two bits at a time.



$$4 < 8$$

No such encoding is possible.  $\square$

A similar Karnaugh map based proof is also fine.

6) The charge carriers in PMOS transistors (holes) move approximately half as fast as the charge carriers in NMOS transistors (electrons). Doubling the width compensates for this, balancing speed.

7) ripple carry      carry select



$$\boxed{d/2}$$