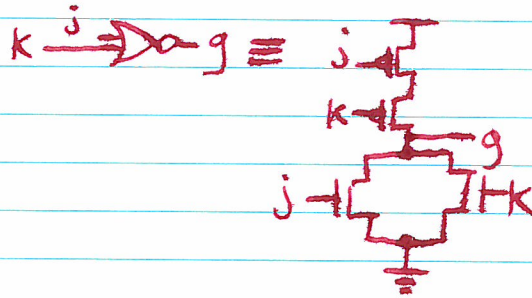

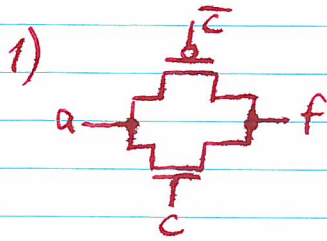


# Solutions to Opt. Quiz.



3)

		bc	
a	0	X	1
	1	X	X

$$\bar{f} = ab + c$$

$$\bar{\bar{f}} = \overline{ab + c}$$

$$f = \overline{ab \cdot c}$$

$$f = (\bar{a} + \bar{b}) \cdot \bar{c}$$